



PARQUE MIRAFLORES - RECORRIDO 2 - UN PARQUE DE SERVICIOS

Pon en el recuadro superior el número que corresponda según el mapa


7




6



8



1



2



4



5



3

